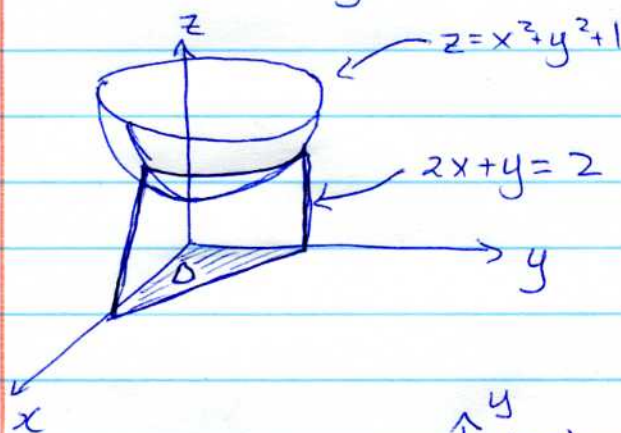
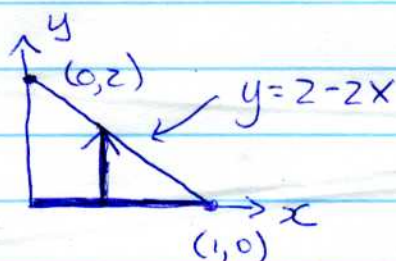


Ex] Find the volume  $V$  of the solid in the first octant bounded by the coordinate planes and the graphs of  $z = x^2 + y^2 + 1$  and  $2x + y = 2$ .

Solution 1]  $z = x^2 + y^2 + 1$  is a paraboloid.  
 $2x + y = 2$  is a plane.



In  $xy$ -plane :



$$D = \{(x, y) \mid 0 \leq x \leq 1, 0 \leq y \leq 2 - 2x\}$$

Also  $z = f(x, y) = x^2 + y^2 + 1$ .

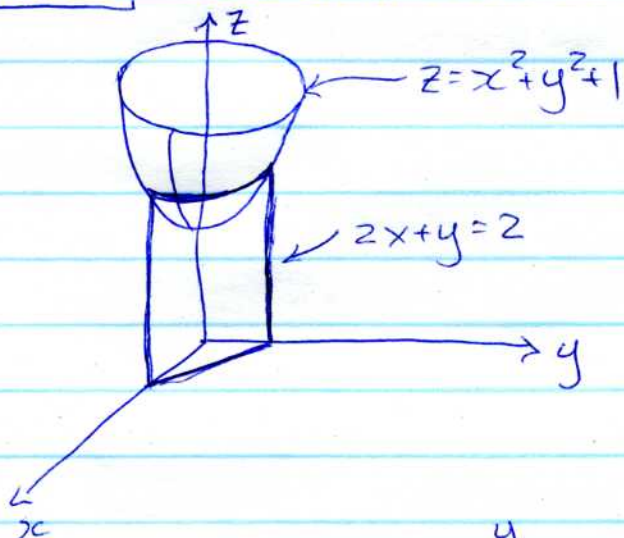
$$V = \iint_D f(x, y) dA$$

$$= \int_0^1 \int_0^{2-2x} (x^2 + y^2 + 1) dy dx$$

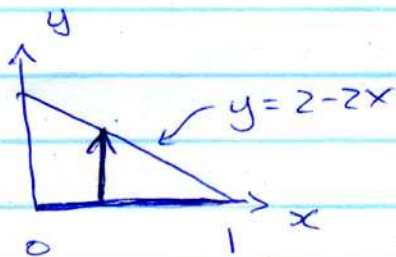
$$= \int_0^1 \left( \frac{14}{3} - 10x + 10x^2 - \frac{14}{3}x^3 \right) dx$$

$$= \frac{11}{6}$$

Solution 2 | We still need the sketch.



In  $xy$ -plane



Region  $E$  is the volume:

$$E = \{(x, y, z) \mid 0 \leq x \leq 1, 0 \leq y \leq 2 - 2x, 0 \leq z \leq x^2 + y^2 + 1\}$$

$$V = \iiint_E dV$$

$$= \int_0^1 \int_0^{2-2x} \int_0^{x^2+y^2+1} dz dy dx$$

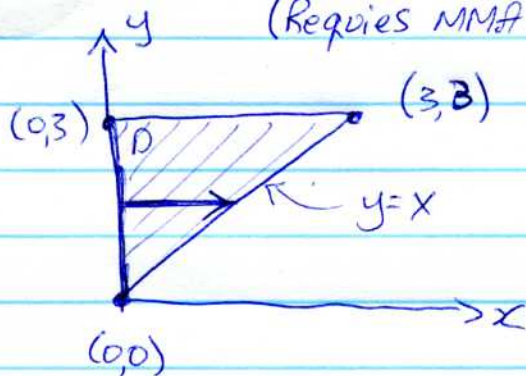
$$= \int_0^1 \int_0^{2-2x} (x^2 + y^2 + 1) dy dx \quad \text{same as before}$$

$$= \frac{11}{6}$$

Ex)  $I = \iint_D \sqrt{x^2+y^2} dA$  where  $D$  is triangular region with vertices  $(0,0)$ ,  $(0,3)$ , and  $(3,3)$ .

(Requires MMA to do integrals)

Solution



$$D = \{(x,y) \mid 0 \leq y \leq 3, 0 \leq x \leq y\}$$

$$I = \int_0^3 \int_0^y \sqrt{x^2+y^2} dx dy$$

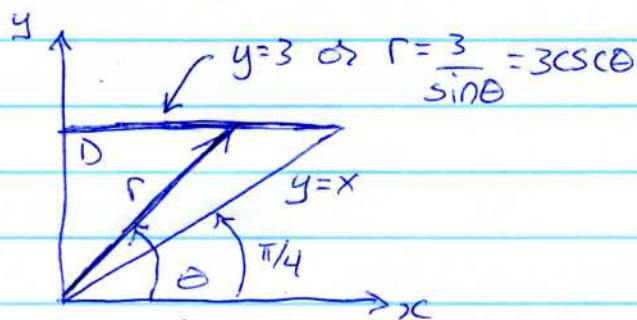
$$= \frac{9}{2} (\sqrt{2} + \ln(1+\sqrt{2}))$$

MMA.

Note: this integral is difficult to do by hand. It would require using a substitution of  $x = y \sinh \theta$  (hyperbolic sine).

Let's try switching to polar: use  $dA = r dr d\theta$

$$\sqrt{x^2+y^2} = r$$



$$D = \{(r,\theta) \mid \pi/4 \leq \theta \leq \pi/2, 0 \leq r \leq 3\csc\theta\}$$

$$I = \int_{\pi/4}^{\pi/2} \int_0^{3\csc\theta} r^2 r d\theta$$

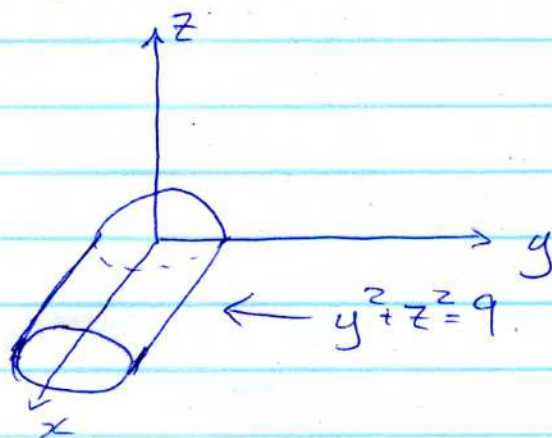
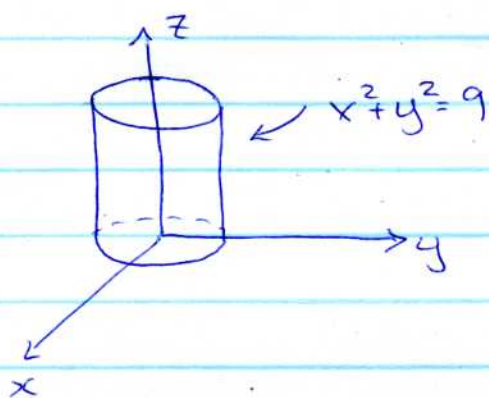
$$= \int_{\pi/4}^{\pi/2} 9\csc^3\theta d\theta$$

$$= \frac{9}{2} (\sqrt{2} - \ln(\tan(\pi/8)))$$

Again, a pretty involved integration by hand

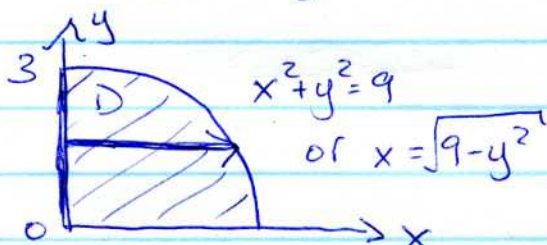
Ex Find the volume  $V$  of the solid bounded by  $x^2 + y^2 = 9$  and  $y^2 + z^2 = 9$ .

Solution Both surfaces are cylinders of radius 3.



Use symmetry: work in first octant & multiply by 8.

Volume lies over  $x^2 + y^2 = 9$ , and function is  $z = f(x, y) = \sqrt{9 - y^2}$



$$D = \{(x, y) \mid 0 \leq x \leq \sqrt{9 - y^2}, 0 \leq y \leq 3\}$$

$$V = 8 \int_0^3 \int_0^{\sqrt{9 - y^2}} \sqrt{9 - y^2} \, dx \, dy$$

$$= 8 \int_0^3 \sqrt{9 - y^2} x \Big|_0^{\sqrt{9 - y^2}} \, dy$$


$$= 8 \int_0^3 (9 - y^2) \, dy$$

$$= 8 \left( 9y - \frac{y^3}{3} \right) \Big|_0^3$$

$$= 8 \left( 27 - \frac{27}{3} \right)$$

$$= 144.$$

Note: if you switch to polar, the region is easier to describe but the integral is harder to do!



$$D = \{(r, \theta) \mid 0 \leq r \leq 3, 0 \leq \theta \leq \pi/2\}$$

$$f(x, y) = f(r \cos \theta, r \sin \theta) = \sqrt{9 - r^2 \sin^2 \theta}$$

$$V = 8 \int_0^{\pi/2} \int_0^3 \sqrt{9 - r^2 \sin^2 \theta} \, r \, dr \, d\theta$$

$$= 8 \int_0^{\pi/2} \int_9^{9 \cos^2 \theta} \sqrt{u} \frac{du \, d\theta}{(-2 \sin^2 \theta)}$$

$$= 8 \int_0^{\pi/2} \left. \frac{1}{2} \frac{1}{\sqrt{u}} \right|_{u=9}^{u=9 \cos^2 \theta} d\theta$$

$$= \frac{8}{-4} \int_0^{\pi/2} \left( \frac{1}{3 \cos \theta \sin^2 \theta} - \frac{1}{3 \sin^2 \theta} \right) d\theta$$

substitution:

$$\text{let } u = 9 - r^2 \sin^2 \theta$$

$$du = -2r \sin^2 \theta \, dr$$

$$\text{when } r=0, u=9$$

$$r=3 \quad u = 9 - 9 \sin^2 \theta$$

$$= 9 \cos^2 \theta$$

= YUCK!! We've already got the answer. Let's stop this madness!!